




















Olympiad Aptitude Test Logical Reasoning- Grade I






Direction (Q. Nos. 1-2) There is a certain relationship between the pair of figures given on either side of. Identify the relationship of given pair and find the matching term.






1.  ::  : ?
- (a)  (b)  (c)  (d) 
2.  :  ::  : ?
- (a)  (b)  (c)  (d) 






Direction (Q.No. 3-4) Find the odd one out from the given options

3. (a)  (b)  (c)  (d) 
4. (a) January (b) March (c) May (d) April

Direction (Q- No 5) Which figure comes next?

5.  ?
- (a)  (b)  (c)  (d) 

6.  ?
- (a)  (b)  (c)  (d) 

7.  ?
- (a)  (b)  (c)  (d) 

8. Find the missing number.

- 1, 6, 11, 16, _____
- (a) 19 (b) 20
(c) 21 (d) None of these

9. Find the missing number.

- 8, 15, 22, 29, _____
- (a) 36 (b) 32
(c) 33 (d) 35

10. Manu has 8 Ben 10 Stickers. Jolly has 18 Ben 10 stickers. Who has more stickers and by how much?

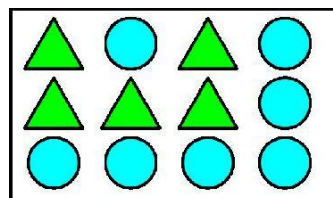
- a. Manu, 10 stickers
b. Jolly, 8 stickers
c. Jolly, 10 stickers
d. None of these

11. Find the correct number to replace the question mark from the box.

54	36	18
45	27	?

- a. 11 (c) 9
b. 15 (d) None

12. Triangle represents Rs. 10 and circle represents Rs. 5. Rita has the following money:



How much money does Rita have in all?

- a. Rs 100
- b. Rs 95
- c. Rs 75
- d. Rs 85

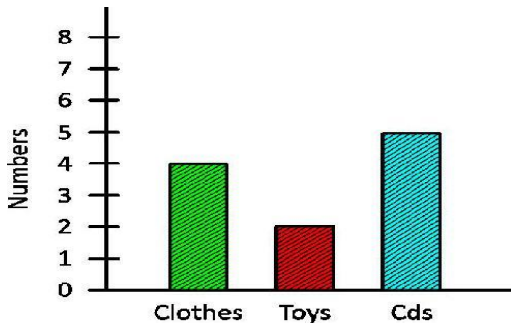
- a. 22 legs
- b. 42 legs
- c. 32 legs
- d. 52 legs

13. Talent public school is open for 5 days in a week and May and June months are summer vacations. How many days are working in the month of June?

June	
Day	Number
Sunday	4
Monday	4
Tuesday	4
Wednesday	5
Thursday	4
Friday	5
Saturday	4

- a. 20 days
- b. 15 days
- c. 18 days
- d. 25 days

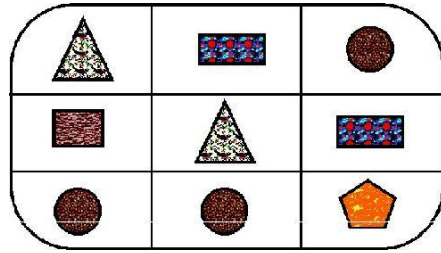
14. Charlie makes the following bar graph of the things that he bought from a shopping mall:



Which one of the following things he bought maximum?

- a. Clothes
- b. CDs
- c. Toys
- d. None of these

16. Look at the following table :



Which figure is in the centre of the table ?

- a.
- b.
- c.

17. Mark arranged his books in the following table:

Books	Mathematics	Science	English
Numbers	6	8	9

Find the total number of books that he arranged in the table.

- a. 6
- b. 9
- c. 8
- d. 23

18. Look at this series: 7, 10, 13, 16, ... What number should come next?

- a. 17
- b. 10
- c. 19
- d. 13

15. One horse has four legs. Replace the question mark in the following table:

Number of horse	Number of legs
	8 legs
	16 legs
	24 legs
	?

Find the odd one out:

