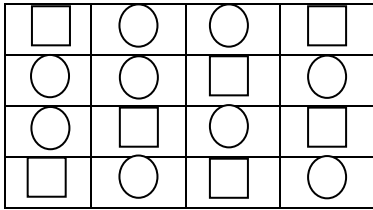




An Eye on Talent

Olympiad Aptitude Test English- Grade II

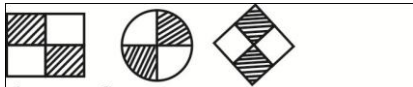
Q-1 Choose the figure which is different from others.



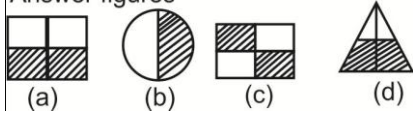
a. b. c. d.

Q-2 Which shape or pattern belongs to the given group of shapes?

Question figures



Answer figures



Q-3 Study the number patterns. Fill in the missing numbers in empty row.

6	7	8	9
5	6	7	8
4	5	6	7
?			

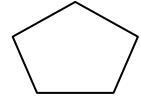
(a) 2 3 4 5 (b) 3 4 5 6
(c) 1 2 3 4 (d) 6 7 8 9

Q-4 Find the number which will replace the question mark (?)



(a) 13 (b) 10 (c) 9 (d) 7

Q-5 How many sides are in a below figure?



a) 2 b) 3
c) 4 d) 5

Q-6 Find the alphabet in place of question mark?

N	O	P	Q
M	X	Y	R
L	W	?	S
K	V	U	T

a) M c) A
b) E d) Z

Q-7 Mr. Singh is lining up his students in this order: girl, girl, boy, boy, girl, girl, boy, boy, girl, girl, boy, ? ? If he continues the same pattern, what are the next two students in the line?

a) boy, boy c) girl, boy
b) boy, girl d) girl, girl

Q-8 Find the odd one out.

a) 345 c) 351
b) 376 d) 367

Q-9 The table below shows how many minutes. Raghav practiced playing the piano last weekend.

Day Time (in minutes)

Friday	25
Saturday	30
Sunday	29

Raghav's Piano Practice How many minutes did Raghav practice playing the piano in all?

a) 74 minutes c) 84 minutes
b) 79 minutes d) 85 minutes

Q-10 Dolly made the number pattern below. 3, 6, 9, ? , ? , 18 Which two numbers are missing from the pattern?

a) 10, 11 c) 12, 15
d) 13, 15 d) 19, 20