



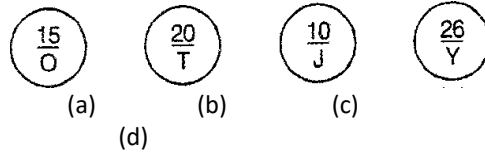
Olympiad Aptitude Test

Logical Reasoning

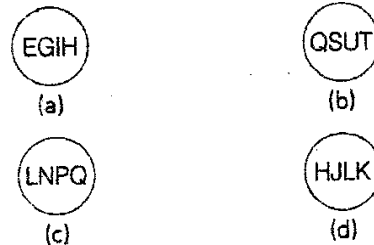
Grade V

- If in a certain code, SPORTS is written as RTSSPO, then how will FLOWER be written in the same code?
 - WERFLO
 - REWOLF
 - OLFREW
 - WOELFR
- If the code of 85349 is 63127, then what will be the code for 6734?
 - 7512
 - 5623
 - 8943
 - 4512
- George ranks sixth in a class. Ziba is ninth from the last. If Aurbey is sixth after George and just in the middle of George and Ziba, then how many students are there in the class?
 - 26
 - 27
 - 25
 - 28
- In a class of 45, where girls are twice that of boys, Adam ranked sixteenth from the top. If there are 10 girls ahead of Adam, then how many boys are after him in rank?
 - 8
 - 9
 - 10
 - 7
- Jack is facing South-East while James is facing exactly the opposite direction in which Jack is facing. Find the direction in which James is facing.
 - South
 - South-East
 - North-West
 - East

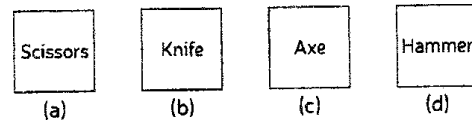
- Four different combinations of letters and numbers are given below. Choose a combination which is different from others.



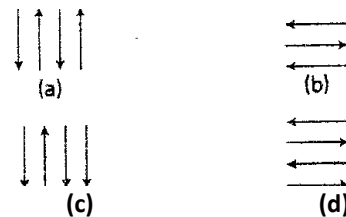
- Which one is different from others?



- Which pattern is different from others?



- Which word does not belong to the group?

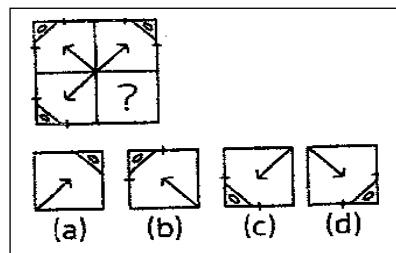


- Which would be a meaningful order of the following?

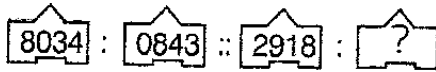
1. Consultation
2. Illness
3. Doctor.
4. Treatment
5. Recovery

- (a) 4,3,1,2,5
- (b) 2, 3,4,1, 5
- (c) 2,3,1,4, 5
- (d) 4,1, 5, 3,2

- Which pattern will complete the following figure?

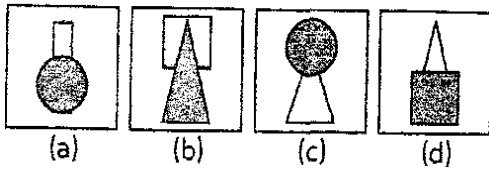
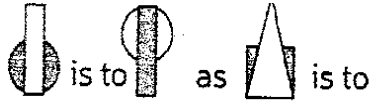


12. Find the missing number in the second pair



- (a) 1892
- (b) 8129
- (c) 9281
- (d) 8219

13. Find the figure which will complete the second pair in the same way as the first pair.



14. An alphabet is given in figure (X). Choose the figure from the alternatives in which the given figure (X) is hidden.

