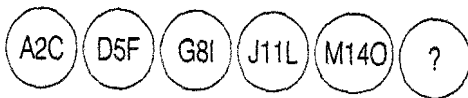




An Eye on Talent

## Olympiad Aptitude Test Logical Reasoning- Grade VI

1. **Direction :** Find the next term in the given series.



- a. P17R                      b. Q20S  
c. Q18S                      d. S18Q

Direction : Find the missing term.

2. 

A100	B200j	D400	G700	?
------	-------	------	------	---

  
a K800 b K900 C K1000 d K1100

3. 

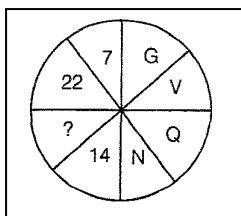
B5C	D9E	F13G	?	J21K	?
-----	-----	------	---	------	---

  
a H711, L25M  
b H171, L25M  
c H171, L52M  
d H117, LM25

4. **If RESANO is coded as S1T203, then MORALE is coded as**

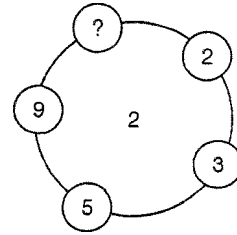
- a. 3N2S1M                  c. NSM123  
b. 123NSM                  d. N3S2M1

5. **Find the missing number**



- a. 12                          c. 17  
b. 14                          d. 15

6. **Find ?**



- a. 12    b. 17    c. 14    d. 15

**Direction:** Read the following information and answer the questions given below.

Five girls are sitting on a bench to be photographed.

- a) Seema is to the left of Rani and to the right of Bindu.  
b) Garima is to right of Rani.  
c) Reeta is between Rani and Garima.

7. Who is in the middle of the photograph?

- a. Bindu                      b. Rani  
c. Reeta                      d. Seema

8. Who is second from the right?

- a. Garima                    b. Rani  
c. Reeta                      d. Bindu

9. If signs '+' and '-' are interchange, and numbers '5' and '8' are interchanged, then which of the following expression is true?

- a.  $82-35 + 55 = 2$   
b.  $82-35 + 55 = 102$   
c.  $85-38 + 85 = 132$   
d.  $52-35 + 55 = 72$

Find the odd one out.

10. 

Bus	Motor cycle	Bicycle	Car
a	b	c	d

11. 

Rabbit	Lion	Cat	Fox
a	b	c	d