



Olympiad Aptitude Test Science- Grade I






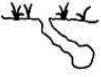


1. Which of the following statement is false?

- (a) Cherry is a fruit (b) Potato is a vegetable
(c) Rice is a grain (d) Groundnut is a spice

2. _____ has just one seed in it but _____ has many seeds in it.

- (a) Mango, Banana (b) Orange, Guava
(c) Papaya, Mango (d) Mango, Papaya

3. Match the animals given in column I with their respective homes given in column II.

Column I		Column II	
(A)	 Bird	(i)	 Stable
(B)	 Honeybee	(ii)	 Nest
(C)	 Horse	(iii)	 Hole
(D)	 Mouse	(iv)	 Beehive

	(A)	(B)	(C)	(D)
(a)	(iv)	(i)	(iii)	(ii)
(b)	(iii)	(ii)	(iv)	(i)
(c)	(ii)	(iv)	(i)	(iii)
(d)	(iii)	(i)	(ii)	(iv)

4. Which of the following is not true?

- (a) Dog guards our home
(b) Deer gives us milk
(c) Sheep gives us wool
(d) Donkey carries load

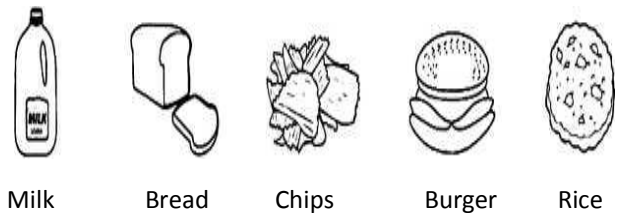
5. Fruits and vegetables should always be _____.

- (a) Cut before eating
(b) Cooked before eating
(c) Properly washed before eating or cooking
(d) Cut before cooking

6. Which of the following statement about Sun is not true?

- (a) Sun gives us heat
(b) Sun shines at night
(c) Sun gives us light
(d) Sun shines during the day

7. Ravi drank a glass of milk, ate 1 piece of bread, 1 packet of chips and 1 burger for breakfast. Then he ate rice, potato.



Milk Bread Chips Burger Rice

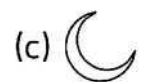

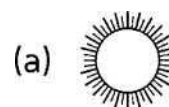
Identify, which foods are not healthy for Ravi?

- (a) Milk and Rice
(b) Burger and Chips
(c) Rice and Chips
(d) Potato and Milk

8. The meal that we take at night is _____

- (a) Dinner (b) Lunch
(c) Breakfast (d) None of these

9. Which of the following things can be seen in the sky?



Moon

(d) All of these

10. While going out to play which safety rule should be followed?

- a. Play in the playground
- b. Wear shoes or sandals
- c. Do not push anyone on the swings
- d. All of the above

11. Which is the food factory of a plant?

- a. Root
- b. Stem
- c. Leaf
- d. Tree-top

12. What helps a mammal to breathe?

- a. Lungs
- b. Pistil
- c. Gills
- d. Not Here

13. Colorful part of eye is known as

- a. iris
- b. cornea
- c. pupil
- d. eyeball

14. Which of the following is NOT a type of bird?

- a. Penguin
- b. Ostrich
- c. Chimpanzee
- d. None of these

15. Which animals only come out at night when it is dark?

- A. Dolphins
- B. Bats
- C. Frogs
- D. All of these

16. Which of the following is a type of fish?

- a. Pelican
- b. Tuna
- c. Whale
- d. None of these

17. Where is the heart located in the body?

- a. Lower back
- b. Head
- c. Chest
- d. None of these

18. Which does NOT help the body digest food?

- a. Teeth
- b. Stomach
- c. Heart
- d. All of these

19. What would you find in the skeletal system?

- a. Bones
- b. Hair
- c. Eyes
- d. None of these

20. What is the main job of the lungs?

- a. Thinking
- b. Digest food
- c. Breathing
- d. All of these